



Learning
Resources®

ages 6+

Learn About 
 **time!** 



Activity Book

Day or Night

Help the animals learn a.m. and p.m. times. If they should do the given task in the a.m. (morning), colour the sun. If the task happens in the p.m. (afternoon/evening), colour the moon. Colour both if they should do it in the morning and afternoon/evening.

Each day has 24 hours in it. These 24 hours are split into two parts, with each part having 12 hours in it. The first 12 hours start at 12 o'clock midnight and end at 12 o'clock noon. We call these hours the a.m. or morning hours.

The second 12 hours begin at 12 o'clock noon and end at 12 o'clock midnight. These hours are called the p.m. hours and they happen in the afternoon and evening.



Craig eats breakfast.

a.m.



p.m.



Jill goes to bed.

a.m.



p.m.



Lenny goes to school.

a.m.



p.m.



Jack brushes his teeth.

a.m.



p.m.



Family eats dinner.

a.m.



p.m.



Time to Eat

Match the time given to the correct clock.


Randy likes to eat breakfast at 8:00.




Randy has a morning snack at 10:30.



Randy eats lunch at 12:00.




At 3:30 Randy has an afternoon snack.



Randy eats dinner with his family at 6:00.



What time do you eat during the day?



Telling Time

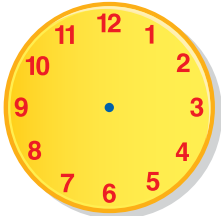
Fill in the blanks to make all 3 times in a row match.



or

A blue rounded rectangular box containing a colon (:).


or _____ o'clock



or

A blue rounded rectangular box containing the text "7:00".

or _____ o'clock

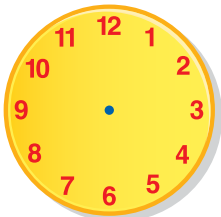


or

A blue rounded rectangular box containing a colon (:).

or 4 o'clock

What is your favorite time of day?



or

A blue rounded rectangular box containing a colon (:).

or _____ o'clock

Matching Time

Match the clock face to the analog clock.



5:00



9:45



6:30




3:15



11:30



7:45



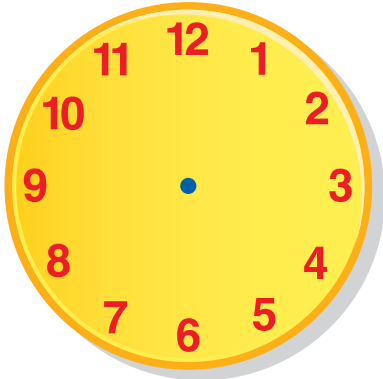
10:00



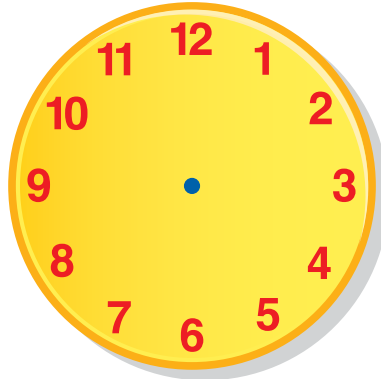
2:00

What Time Is It?

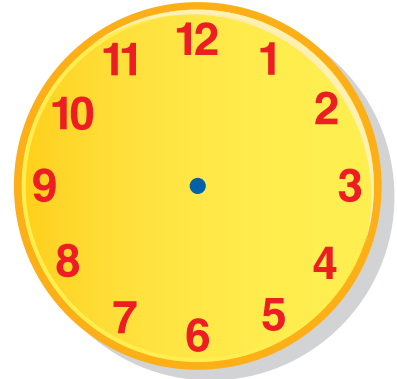
Draw the hands on the clocks to show the time.



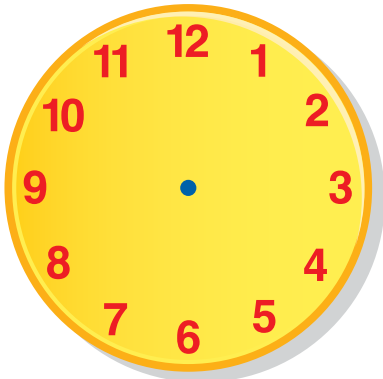
10:30



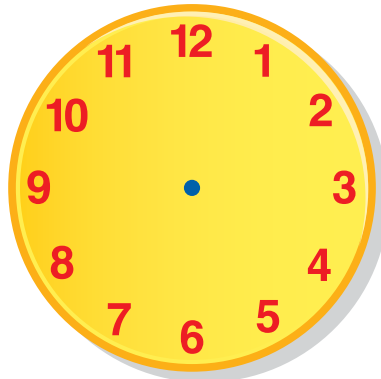
5:00



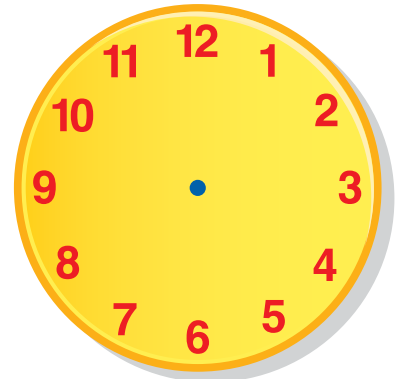
2:15



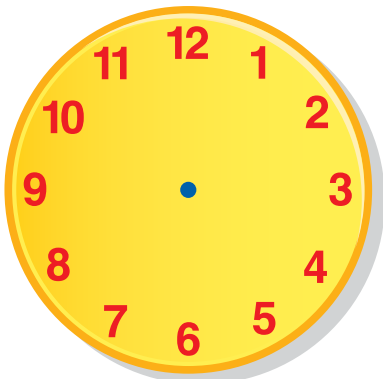
12:00




6:30



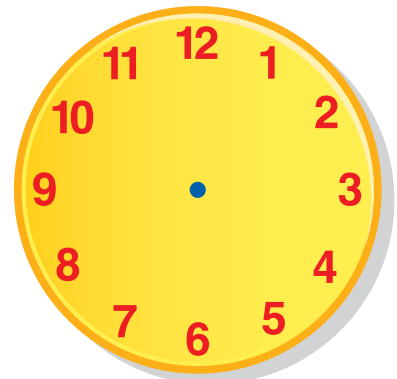
4:45



8:15




3:00



7:30

Riddle Time



Match the clocks to the times below to solve the riddle.



S



F



S



H



A



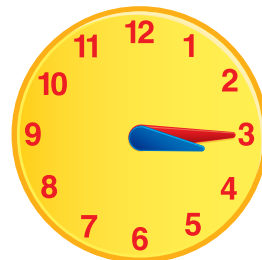
R



T



I



A

What type of fish loves the night?

5:15

12:50

8:30

3:15

10:35

4:00

9:45

2:20

7:00